

OXFORD CAMBRIDGE AND RSA EXAMINATIONS

Tuesday 5 November 2019 – Morning

GCSE (9–1) Mathematics

J560/01 Paper 1 (Foundation Tier)

**Time allowed: 1 hour 30 minutes
plus your additional time allowance**

YOU MUST HAVE:

Insert for question 19

YOU MAY USE:

**a scientific or graphical calculator
geometrical instruments
tracing paper
a model for question 1(b)**

Please write clearly in black ink.

Centre number

--	--	--	--	--

Candidate number

--	--	--	--

First name(s) _____

Last name _____

READ INSTRUCTIONS OVERLEAF



INSTRUCTIONS

Use black ink. You may use an HB pencil for graphs and diagrams.

Answer ALL the questions.

Read each question carefully before you start to write your answer.

Where appropriate, your answers should be supported with working. Marks may be given for a correct method even if the answer is incorrect.

Write your answer to each question in the space provided.

Additional paper may be used if required, but you must clearly show your candidate number and question number(s).

INFORMATION

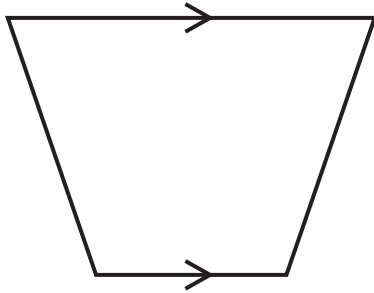
The total mark for this paper is 100.

The marks for each question are shown in brackets [].

Use the π button on your calculator or take π to be 3.142 unless the question says otherwise.

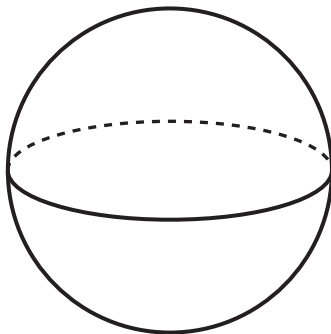
Answer ALL the questions.

- 1 (a) Write down the mathematical name of this quadrilateral.**



(a) _____ [1]

- (b) Write down the mathematical name of this solid.
You may use a model to help you.**



(b) _____ [1]

2 (a) Complete this list to show all the factors of 30.

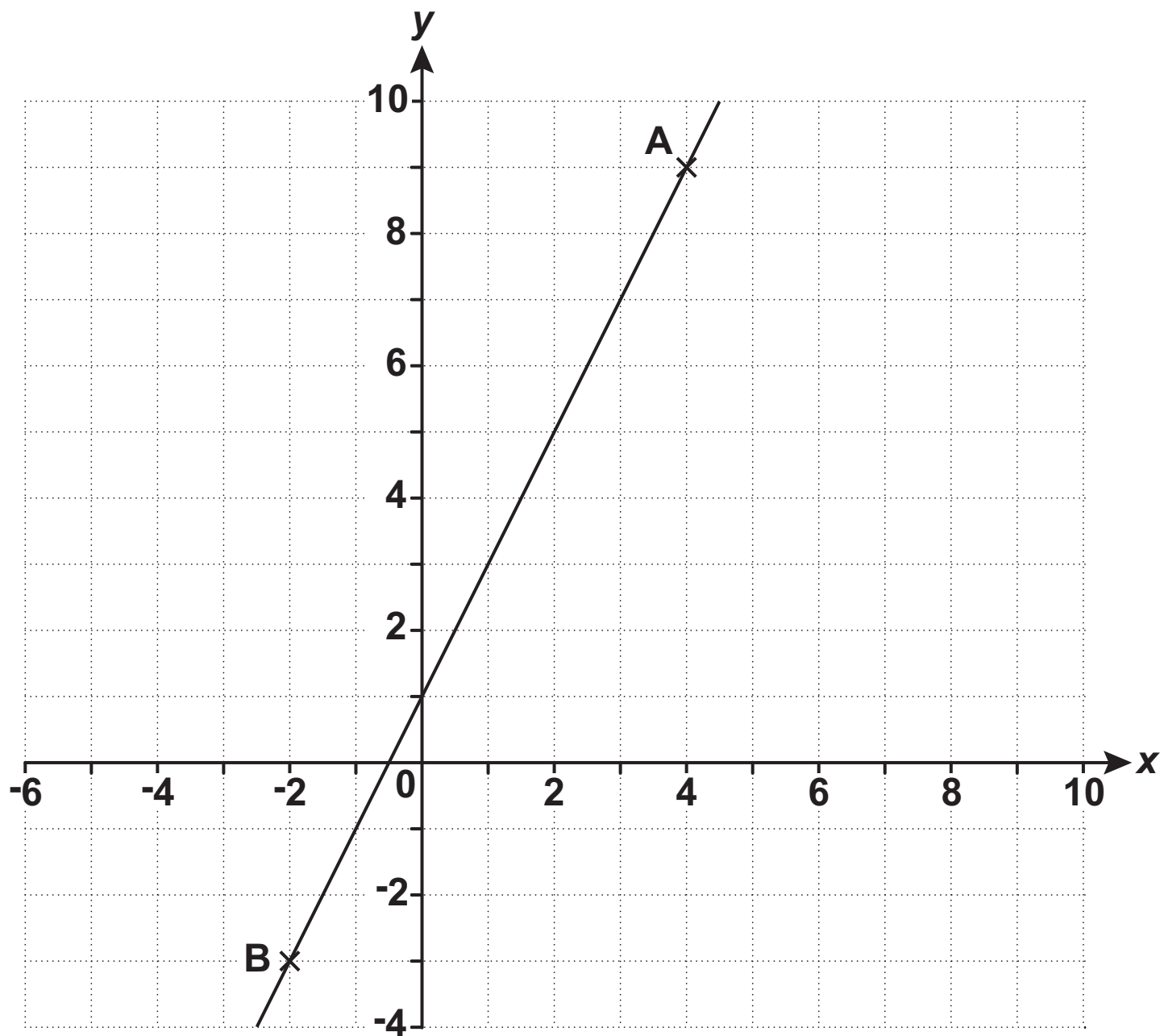
1 2 _____ _____ _____ 10 _____ 30 [2]

(b) Write down the highest common factor (HCF) of 25 and 30.

(b) _____ [1]

BLANK PAGE

3 Line AB is shown on this coordinate grid.



(a) Write down the coordinates of

(i) point A,

(a)(i) (_____ , _____) [1]

(ii) point B.

(ii) (_____ , _____) [1]

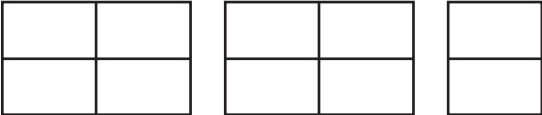

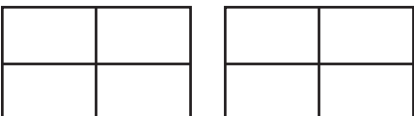

(b) Plot point C on the grid at (7, -2). [1]

**(c) The equation of line AB is $y = 2x + 1$.
A line parallel to AB goes through the point (0, 4).**

Write down the equation of the parallel line.

(c) _____ [2]

- 4 A theme park asked 900 people to choose their favourite activity from a list of five.
The pictogram shows the results for four of the activities.

Thrill rides	
Family rides	
Entertainment	
Children's rides	
Water rides	

Key:  represents 100 people

(a) (i) How many people chose entertainment?

(a)(i) _____ [1]

(ii) How many MORE people chose water rides than family rides?

(ii) _____ [2]

(iii) All 900 people chose one of the five activities.

Complete the pictogram for children's rides. [3]

- (b) Will plays a game at the theme park.
There are 20 cards numbered from 1 to 20.
Will takes a card at random.
He wins if the card he chooses shows a prime number.**

**Work out the probability that Will wins.
Give your answer as a fraction in its simplest form.**

(b) _____ [4]

- (c) A family ticket for the theme park costs £68.
If the ticket is bought online it costs 15% less.**

**How much does it cost to buy a family ticket
online?**

(c) £ _____ [3]

5 Simplify.

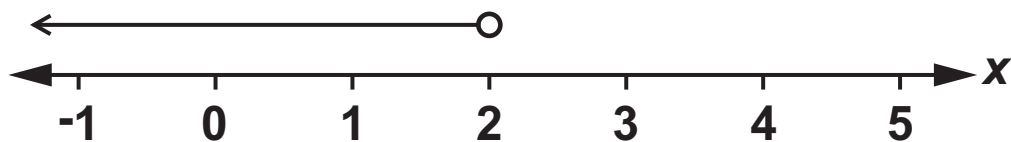
(a) $4a + 5a - 7a$

(a) _____ [1]

(b) $3g - 2f + 8g + 5f$

(b) _____ [2]

6 Write down the inequality shown on this number line.



_____ [2]

7 Factorise fully.

(a) $6 + 9y$

(a) _____ [1]

(b) $2x^2 + 6x$

(b) _____ [2]

8 Plaza United are playing a football match away from home.

**(a) 379 supporters are going to the match by coach.
Each coach seats 45 people.**

**What is the smallest number of coaches that will
be needed?**

(a) _____ [2]

- (b) In their last 50 matches, Plaza United have drawn 10 matches, lost 5 and won the rest.**

Sam claims

The probability that Plaza United will win this match is 0.7.

- (i) Show calculations to support Sam's claim. [2]**

- (ii) Give one reason why Sam's claim may not be reliable.**

[1]

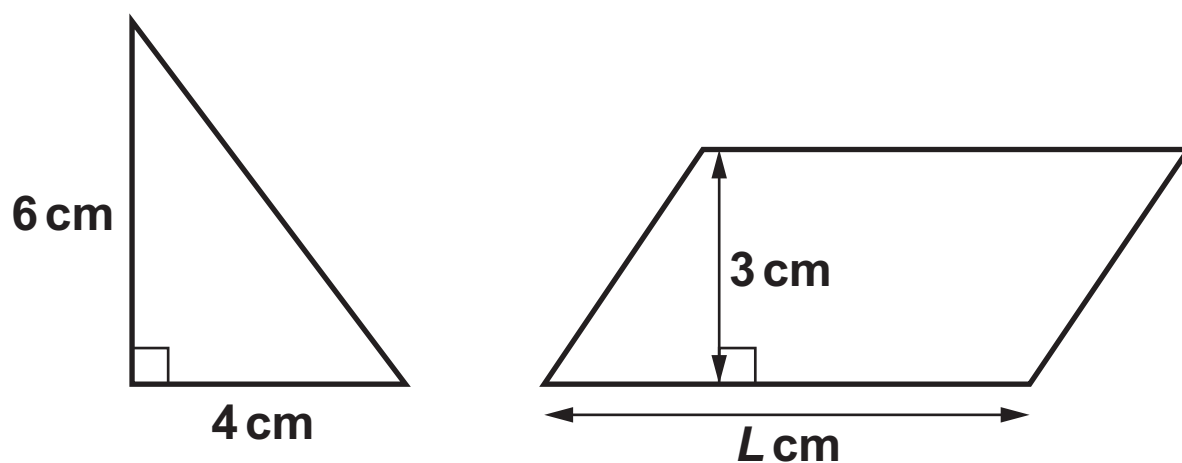
- 9 Mr and Mrs Jones buy cinema tickets for themselves and their three children.
The cost of an adult ticket is £6 more than a child ticket.
The total cost of the FIVE tickets is £45.**

Work out the cost of an adult ticket.

An adult ticket costs £_____ [5]

- 10 The area of the parallelogram is four times the area of the triangle.

NOT TO SCALE



Calculate the length, L , of the parallelogram.

_____ cm [5]

11 Harry has a job.

On Friday, he is paid £8.50 per hour.

On Saturday, he is paid $1\frac{1}{2}$ times that rate.

He works for 4 hours on Friday.

He works from 8 am until 1 pm on Saturday.

How much does Harry earn in total for these two days?

£ _____ [6]

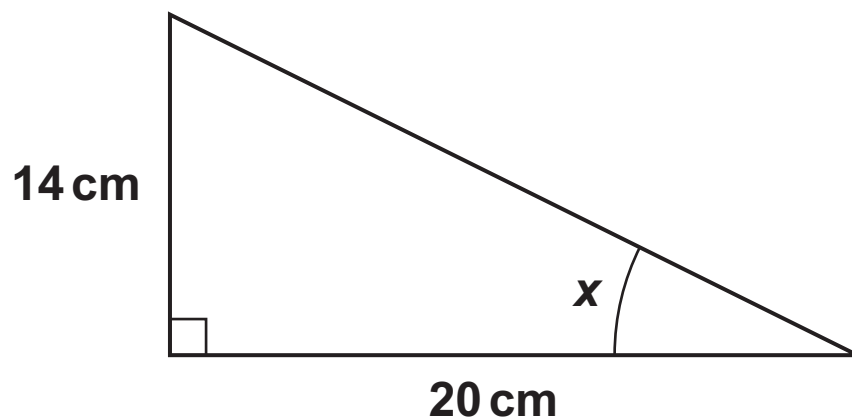
12 The volume of a cube is 125cm^3 .

**Calculate the total surface area of the cube.
Give the units of your answer.**

_____ **[5]**

13 Here is a right-angled triangle.

NOT TO SCALE



Show that angle x is 35° , correct to the nearest degree. [3]

- 14 Dean drives a distance of 760 km in 9 hours.
Robert drives a distance of 559 km in 6 hours
30 minutes.**

**Who has the highest average speed?
Show how you decide.**

_____ because _____
_____ [4]

- 15 Andrea is 165 cm tall, correct to the nearest cm.
Joel is 170 cm tall, correct to the nearest 10 cm.**

Show that Andrea could be taller than Joel. [3]

- 16 Carol makes birthday cards.
Each card takes the same amount of time to make.**

**She makes 3 cards in 48 minutes.
She has an order for 80 cards.**

**Can she complete this order in 3 days if she works
8 hours each day?
Show how you decide.**

_____ **because** _____

_____ **[5]**

- 17 The table below shows the area, in square kilometres (km^2), of some countries.

Country	Area (km^2)
Australia	7.69×10^6
Latvia	6.46×10^4
Luxembourg	2.59×10^3
Russia	1.71×10^7
Singapore	7.24×10^2
Sweden	4.50×10^5

- (a) Write the area of Sweden as an ordinary number.

(a) _____ km^2 [1]

- (b) Which of the above countries has the smallest area?

(b) _____ [1]

(c) Alexis says

The area of Australia is approximately three times larger than the area of Luxembourg.

**Is she correct?
Show how you decide.**

**Alexis is _____ because _____
_____ [2]**

**(d) Work out the total area of Russia and Australia.
Give your answer in standard form, correct to
2 significant figures.**

(d) _____ km² [4]

- 18 Bob makes dry concrete by mixing cement, sand and stone in the ratio 1 : 2 : 3 by weight. He buys the cement, sand and stone in bags as shown in this table.**

	Weight of bag (kg)	Cost per bag (£)
Cement	25	5.50
Sand	20	2.00
Stone	15	3.90

He packs the dry concrete into 30 kg bags.

Bob buys just enough cement, sand and stone to make 50 bags of dry concrete.

(a) Show that Bob buys 500 kg of sand. [3]

(b) Bob sells the 50 bags of dry concrete for a total of £396.

Calculate Bob's percentage profit.

(b) _____ % [5]

19 12 students take two tests.
Each test is out of 60.
The scatter diagram on the insert shows the results
for 10 of the students.

(a) The table shows the results for the other
2 students.

Test 1	36	38
Test 2	44	41

Plot these results on the scatter diagram. [1]

(b) Describe the type of correlation shown in the
scatter diagram.

(b) _____ **[1]**

(c) (i) Draw a line of best fit on the scatter diagram. [1]

**(ii) Another student was absent for Test 2.
The student scored 40 marks on Test 1.**

**Use your line of best fit to estimate a result for
this student on Test 2.**

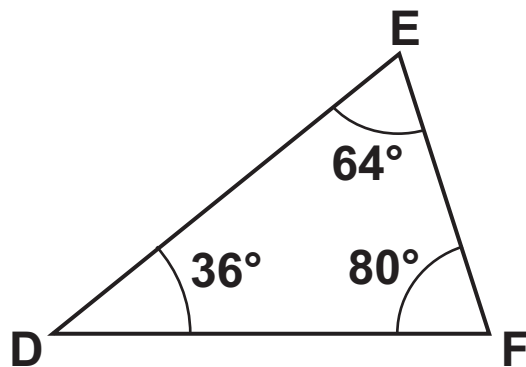
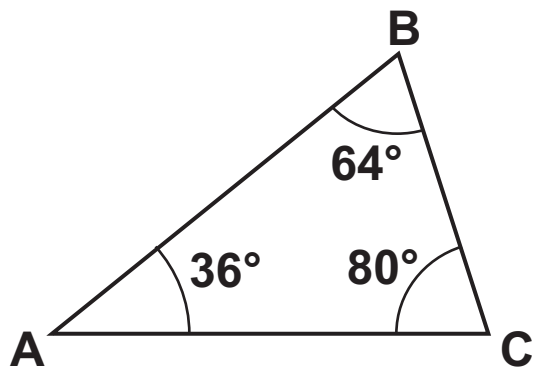
(c)(ii) _____ [1]

- (d) Work out the percentage of THE 12 STUDENTS whose result on Test 1 is LOWER than their result on Test 2.**

(d) _____ % [4]

20 (a) Are these two triangles definitely congruent?
Give a reason.

NOT TO SCALE

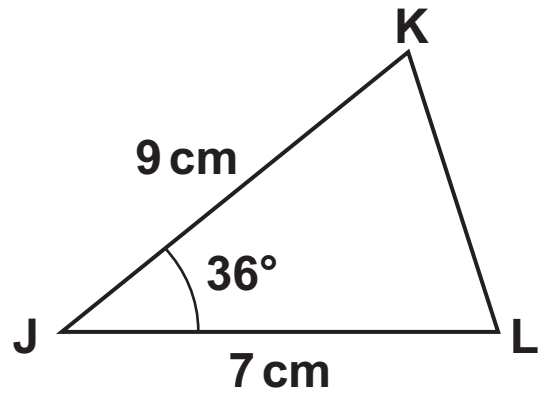
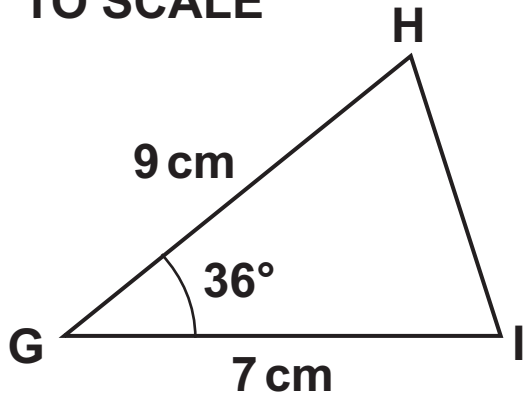


_____ because _____

_____ [1]

(b) Prove that these two triangles are congruent.

NOT TO SCALE



[3]

END OF QUESTION PAPER

BLANK PAGE

BLANK PAGE

BLANK PAGE

Copyright Information

OCR is committed to seeking permission to reproduce all third-party content that it uses in its assessment materials. OCR has attempted to identify and contact all copyright holders whose work is used in this paper. To avoid the issue of disclosure of answer-related information to candidates, all copyright acknowledgements are reproduced in the OCR Copyright Acknowledgements Booklet. This is produced for each series of examinations and is freely available to download from our public website (www.ocr.org.uk) after the live examination series.

If OCR has unwittingly failed to correctly acknowledge or clear any third-party content in this assessment material, OCR will be happy to correct its mistake at the earliest possible opportunity.

For queries or further information please contact The OCR Copyright Team, The Triangle Building, Shaftesbury Road, Cambridge CB2 8EA.

OCR is part of the Cambridge Assessment Group; Cambridge Assessment is the brand name of University of Cambridge Local Examinations Syndicate (UCLES), which is itself a department of the University of Cambridge.